







$2 + 1 =$ 


$3 + 3 =$ 


$4 + 1 =$ 


$5 + 5 =$ 

$5 + 3 =$ 

$2 + 2 =$ 

$4 + 5 =$ 

$5 + 2 =$ 

$1 + 1 =$ 

Càlcul. Suma i escriu el resultat al final. Pots ajudar-te marcant els globus.

(Aquestes activitats les podeu realitzar sense haver d'imprimir-les. En un full a part)

•	•
---	---

1	+	2	=	3
---	---	---	---	---

•	•
---	---

-	+	-	=	-
---	---	---	---	---

•	•
---	---

-	+	-	=	-
---	---	---	---	---

•	•
---	---

-	+	-	=	-
---	---	---	---	---

•	•
---	---

-	+	-	=	-
---	---	---	---	---

•	•
---	---


-	+	-	=	-
---	---	---	---	---

•	•
---	---

-	+	-	=	-
---	---	---	---	---

•	•
---	---

-	+	-	=	-
---	---	---	---	---



Càlcul. Completa i suma.

Si vols també et pots construir aquesta màquina de sumar.

(Aquestes activitats les podeu realitzar sense haver d'imprimir-les. En un full a part)