

MATEMÀTIQUES

Activitats de suport

1. Suma.

$$\begin{array}{r} 47 \\ + 24 \\ \hline \end{array}$$

.....

$$\begin{array}{r} 40 \\ 15 \\ + 25 \\ \hline \end{array}$$

.....

$$\begin{array}{r} 65 \\ + 17 \\ \hline \end{array}$$

.....

$$\begin{array}{r} 32 \\ 29 \\ + 14 \\ \hline \end{array}$$

.....

2. Completa.

..... + +	tres-cents disset.
339 + +
..... + +	tres-cents vint-i-dos.
390 +

3. Suma i resta les centenes.

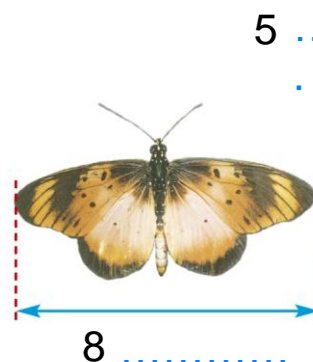

$700 + 200 = \dots\dots\dots$

$900 - 300 = \dots\dots\dots$


$400 + 400 = \dots\dots\dots$

$600 - 200 = \dots\dots\dots$

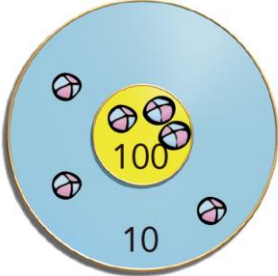
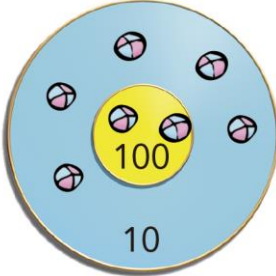
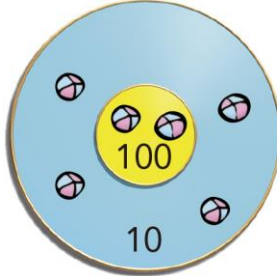
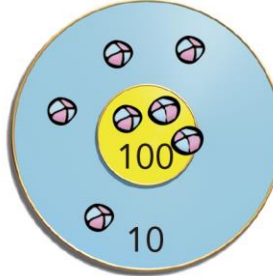
4. Escribeu **cm** o **m** on correspongui.



5



5. Quants punts té cadascú? Encercla el nombre del guanyador.

PAULA	MARC	JOAN	LAURA
			
..... punts punts punts punts

6. Calcula.

4	1		⇒	10
			⇒	10
1	8		⇒	10
↓	↓	↓		
11	10	9		



6	2		⇒	13
	8		⇒	16
		6	⇒	19
↓	↓	↓		
15	15	18		